

## End of unit check



Your teacher  
will ask you  
these questions.

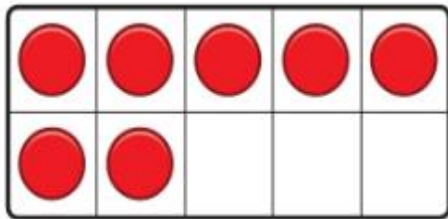


1 What is the missing number?

\_\_\_\_\_ 1 2 3

- A 4      B 1      C 0      D 5

2 What is the number?





- A 3      B 4      C 5      D 7

3 Demi is counting from 1 to 10. She says, 'four'.  
What numbers come next?

- A 3, 2, 1      C 5, 6, 7  
B 5, 7, 6      D 4, 5, 6

4 Mary has 5 . Seb has 4 .  
Which statement is correct?

- A Seb has more  than Mary.  
B Mary has fewer  than Seb.  
C They both have the same amount of .  
D Seb has fewer  than Mary.

5 Which number is 1 more than 7?

- A 8      B 7      C 6      D 71

## Think!

Bea and Seth both have balloons.

Bea has .

Seth has .

What is the same?

What is different?

These words  
might help you.

balloon    1    one  
more    3    three  
less    5    five

